



Cambridge IGCSE™

CANDIDATE
NAME

--

CENTRE
NUMBER

--	--	--	--	--

CANDIDATE
NUMBER

--	--	--	--



MATHEMATICS

0580/13

Paper 1 (Core)

May/June 2020

1 hour

You must answer on the question paper.

You will need: Geometrical instruments

INSTRUCTIONS

- Answer **all** questions.
- Use a black or dark blue pen. You may use an HB pencil for any diagrams or graphs.
- Write your name, centre number and candidate number in the boxes at the top of the page.
- Write your answer to each question in the space provided.
- Do **not** use an erasable pen or correction fluid.
- Do **not** write on any bar codes.
- You should use a calculator where appropriate.
- You may use tracing paper.
- You must show all necessary working clearly.
- Give non-exact numerical answers correct to 3 significant figures, or 1 decimal place for angles in degrees, unless a different level of accuracy is specified in the question.
- For π , use either your calculator value or 3.142.

INFORMATION

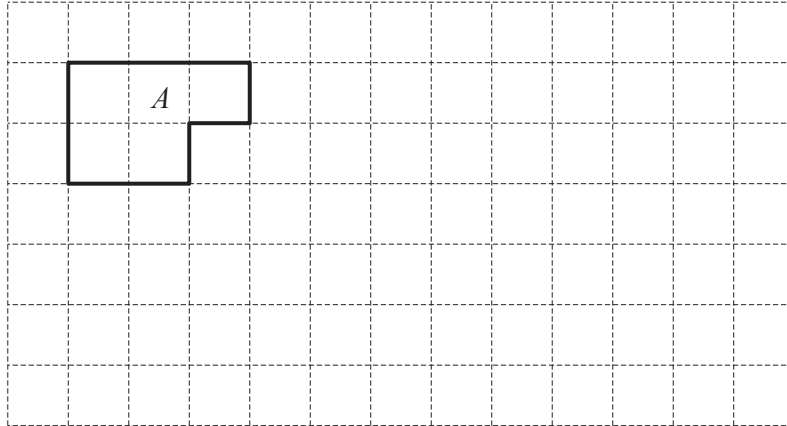
- The total mark for this paper is 56.
- The number of marks for each question or part question is shown in brackets [].

This document has **12** pages. Blank pages are indicated.

1 Write six hundred and seven thousand and twenty-one in figures.

..... [1]

2



On the grid, draw a shape that is congruent to shape *A*. [1]

3 Edelgard tries to calculate $\frac{68+18}{9-5}$.

(a) She types into her calculator $68 + 18 \div 9 - 5$.

Explain why this does not give Edelgard the correct answer.

..... [1]

(b) Work out the correct answer to $\frac{68+18}{9-5}$.

..... [1]

4 A train from Woodton to Northley takes 6 hours 25 minutes.
The train leaves Woodton at 19 46.

Work out the time the train arrives at Northley.

..... [1]

5 Write down the number that is 7 more than -38 .

..... [1]

6 Simplify.

$$5w + 3h - 7w + 8h$$

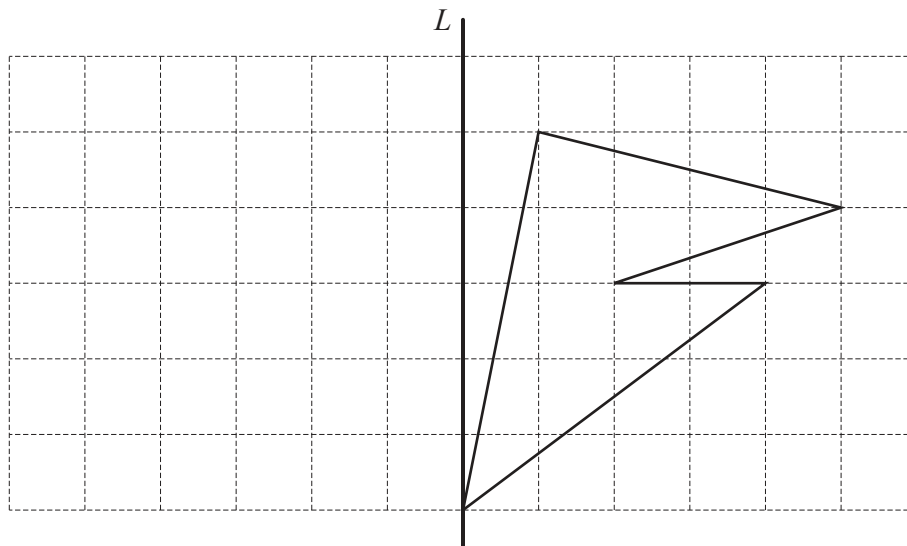
..... [2]

7 (a) Write down the mathematical name of a quadrilateral that has

- rotational symmetry of order 1
- and
- only one line of symmetry.

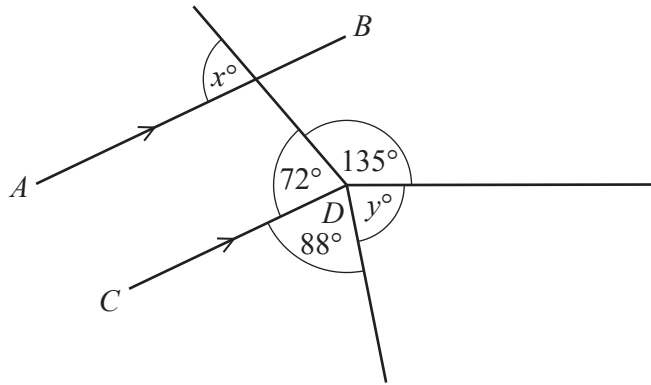
..... [1]

(b) Reflect the shape in line L .



[2]

8



NOT TO SCALE

In the diagram, AB is parallel to CD .

- (a) Find the value of x .
Give a geometrical reason for your answer.

$x = \dots\dots\dots$ because $\dots\dots\dots$ [2]

- (b) Work out the value of y .
Give a geometrical reason for your answer.

$y = \dots\dots\dots$ because $\dots\dots\dots$ [2]

9

- 32 33 34 35 36 37 38 39

From this list of numbers, write down

- (a) a multiple of 8, [1]

- (b) a square number, [1]

- (c) a prime number. [1]

10 (a) A circular garden has diameter 11.4 m.

Draw the garden accurately, using a scale of 1 cm represents 1.5 m.

Scale: 1 cm to 1.5 m

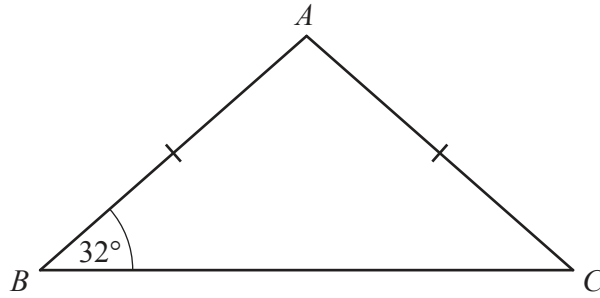
[2]

(b) On a map, the distance between two towns is 9.6 cm.
The scale of the map is 1 : 50 000.

Work out the actual distance between the two towns in kilometres.

..... km [2]

11

NOT TO
SCALE

Triangle ABC is isosceles.
Angle $ABC = 32^\circ$ and $AB = AC$.

Find angle BAC .

Angle $BAC = \dots\dots\dots$ [2]

12 A bag contains yellow balls, pink balls and green balls only.

The ratio yellow balls : pink balls : green balls = 7 : 3 : 5.
There are 42 yellow balls in the bag.

Work out the total number of balls in the bag.

$\dots\dots\dots$ [2]

13 On any day, the probability that Marcus will get a seat on the school bus is 0.93 .

(a) Write down the probability that he will **not** get a seat on the school bus today.

$\dots\dots\dots$ [1]

(b) There are 200 school days in a year.

Work out the expected number of days in a year that Marcus will **not** get a seat.

$\dots\dots\dots$ [1]

14 Simplify.

(a) $p^2 \times p^4$

..... [1]

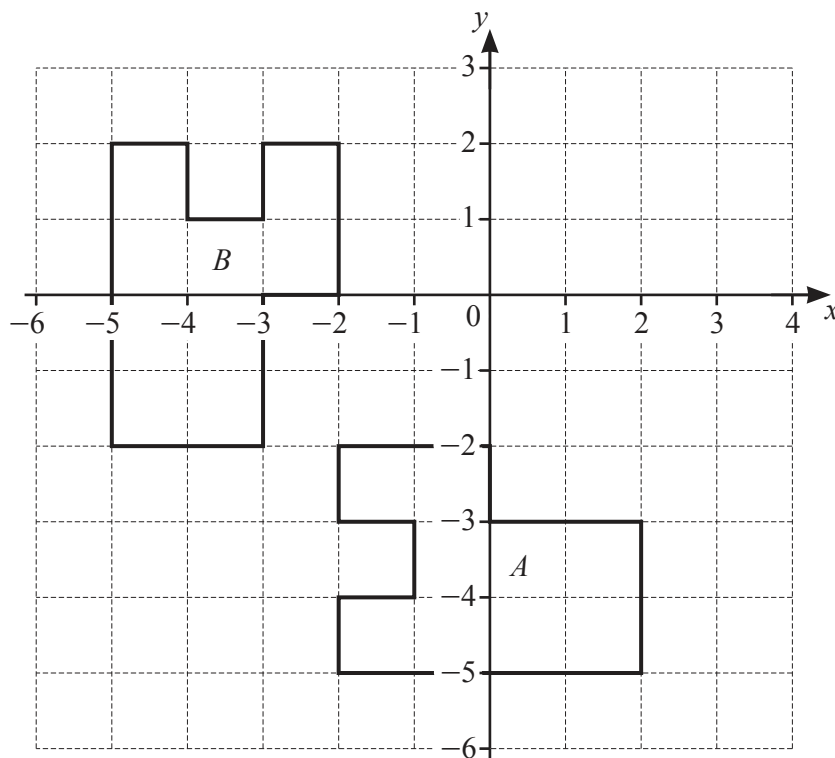
(b) $m^{15} \div m^5$

..... [1]

(c) $(k^3)^5$

..... [1]

15



Describe fully the **single** transformation that maps shape *A* onto shape *B*.

.....

..... [3]

- 16 **Without using a calculator**, work out $3\frac{1}{4} - 2\frac{2}{3}$.

You must show all your working and give your answer as a fraction in its simplest form.

..... [3]

- 17 A chef buys some cheese from France.
200 g of cheese costs 3.45 euros.
The exchange rate is \$1 = 0.84 euros.

Work out the maximum mass of cheese the chef can buy with \$150.
Give your answer in kilograms, correct to 1 decimal place.

..... kg [4]

- 18 Sonia wants to invest \$5000 for 6 years.

Bank A pays compound interest at a rate of 3.5% per year.

Bank B increases the \$5000 by 22% at the end of 6 years.

Which bank will give Sonia the most money at the end of 6 years and by how much?
You must show all your working.

Bank A

Bank B

Bank will give \$ more money. [5]

- 19 By rounding each number correct to 1 significant figure, estimate the value of

$$\frac{71 \times 32.4}{4.8^2}$$

You must show all your working.

..... [2]

- 20 Des thinks of two numbers.
The sum of his two numbers is -6 .
The difference between his two numbers is 62 .

Find the two numbers.

..... and [4]

- 21 A solid cylinder has radius 3 cm and height 4.5 cm.

Calculate the **total** surface area of the cylinder.

..... cm^2 [4]

BLANK PAGE

Permission to reproduce items where third-party owned material protected by copyright is included has been sought and cleared where possible. Every reasonable effort has been made by the publisher (UCLES) to trace copyright holders, but if any items requiring clearance have unwittingly been included, the publisher will be pleased to make amends at the earliest possible opportunity.

To avoid the issue of disclosure of answer-related information to candidates, all copyright acknowledgements are reproduced online in the Cambridge Assessment International Education Copyright Acknowledgements Booklet. This is produced for each series of examinations and is freely available to download at www.cambridgeinternational.org after the live examination series.

Cambridge Assessment International Education is part of the Cambridge Assessment Group. Cambridge Assessment is the brand name of the University of Cambridge Local Examinations Syndicate (UCLES), which itself is a department of the University of Cambridge.